





# August Problem of the Day

SUNDAY	MONDAY	TUESDAY	WEDNESDAY	THURSDAY	FRIDAY	SATURDAY
 $2\frac{1}{3} + 1\frac{2}{3} =$ <input type="text"/>	 625 kids play sports. If there are 125 kids on each team, how many sports are there? <input type="text"/>	 Ann baked from 3:15-5:15, then watched TV until 9:15. How long did she spend total? <input type="text"/>	What number is in the ten thousands place: 16,492 <input type="text"/>	$100 \div 50 =$ <input type="text"/>	6 friends have 18 cookies. How many do they each get if they share equally? <input type="text"/>	Find $\frac{1}{3}$ of 30. <input type="text"/>
$12\frac{1}{3} - \frac{4}{3} =$ <input type="text"/>	What number is 69 less than 9x9? <input type="text"/>	How much more is 156 than 143? <input type="text"/>	What is the difference between 206 and 192? <input type="text"/>	Find the missing number: $336 + ? = 351$ <input type="text"/>	$128 \div 8 =$ <input type="text"/>	How much more is 7x6 than 5x5? <input type="text"/>
$14\frac{2}{5} + 3\frac{3}{5} =$ <input type="text"/>	Find the area of a rectangle with length of 10 and width of 2. <input type="text"/>	$7 \times 3 =$ <input type="text"/>	What is 3 less than 5x5? <input type="text"/>	Sam and Beth each have 12 pieces of gum. Sam gave 1 away. How many pieces do they have now in all? <input type="text"/>	$9\frac{1}{6} + 14\frac{5}{6} =$ <input type="text"/>	
A square has a perimeter of 100. Find the length of each side. <input type="text"/>	Find the area of a rectangle with length of 9 and width of 3. <input type="text"/>	4 family members each have 7 fish. How many do they have total? <input type="text"/>	$784 - 755 =$ <input type="text"/>	6 groups of 5 is equal to: <input type="text"/>	$2,361 - 2,335 =$ <input type="text"/>	$3,641 - 3,622 =$ <input type="text"/>
$2,361 - 2,335 =$ <input type="text"/>	Find the area of a rectangle with length of 9 and width of 3. <input type="text"/>	4 family members each have 7 fish. How many do they have total? <input type="text"/>	$784 - 755 =$ <input type="text"/>	6 groups of 5 is equal to: <input type="text"/>	$2,361 - 2,335 =$ <input type="text"/>	$3,641 - 3,622 =$ <input type="text"/>